



Shadows

Can you tell what each of these shadows are?

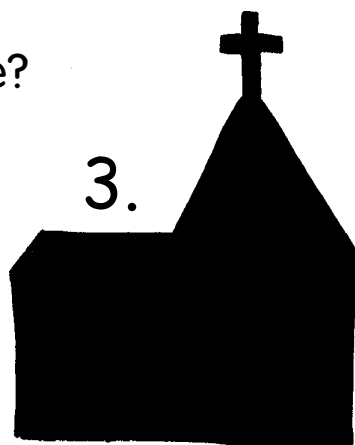
1.



2.



3.



4.



5.



6.



7.



1 is a _____.

2 is a _____.

3 is a _____.

4 is a _____.

5 is a _____.

6 is a _____.

7 is a _____.